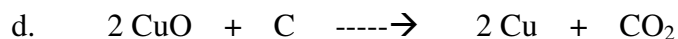





HONORS CHEMISTRY
WORKSHEET 12b.

Name: _____

1. In each of the following, determine which element is oxidized and which is reduced. Also, identify the oxidizing agent and the reducing agent.



2. Use the half-reaction method to balance each of these equations. Add H^+ and H_2O as needed.

