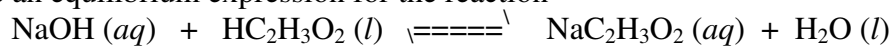


HONORS CHEMISTRY

WORKSHEET 10c.

Name: _____

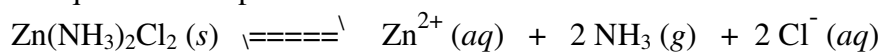
1. Write an equilibrium expression for the reaction



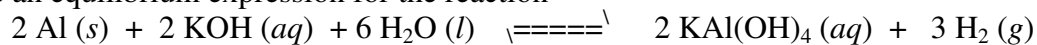
2. Write an equilibrium expression for the reaction



3. Write an equilibrium expression for the reaction



4. Write an equilibrium expression for the reaction



5. Write an equilibrium expression for the reaction

