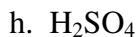
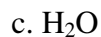
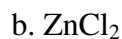


HONORS CHEMISTRY
HOMEWORK 12a.

Name: _____

1. Specify the oxidation state of each element in the following formulas:



**2. In each of the following, determine which element is oxidized and which is reduced:
(If an element appears more than once, specify which occurrence undergoes change.)**

